


SAMPLE PAPER

AGE 6-7

MATHS – WORD PROBLEMS



1. The largest bird Ostrich lays the largest egg. If one egg weighs 2 kg, what would be the weight of 4 eggs?



2. I had my dinner at 8 o'clock. Was it 8 AM or 8 PM?

3. I went to the Zoo with my mum. There were many animals. I went to see the bears first. I saw 3 brown bears, 2 sloth bears and a panda. How many bears did I see altogether?



4. Mary has 2 coins: a  and a . How much does Mary have?

5. My grandmother's doctor asked her to eat an apple a day. How many apples should we buy her for a week?



6. Which month comes before January?

7. Aunt Emily visited us. She brought 10 cupcakes. I and my sister ate 4 cupcakes. How many cupcakes are remaining in the box now?



8. Milly invited her friends for a pizza party. She ordered 8 chicken pizzas and 5 sausage pizzas. How many pizzas did she order altogether?



9. Oliver shared his cake with two friends. Paul shared his cake with one friend. Who got to eat a bigger piece: Oliver or Paul?

10. My Dad helped me with my homework. We started at 6 o'clock and it took two hours to complete. What was the finishing time?

11. Write 10 in words. _____

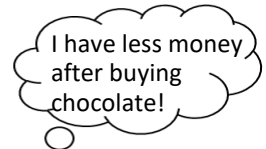
12. A book had 6 pages. Half the pages were torn. How many pages were in good condition? _____

13. Help Mark to count in fives. Write the next number:
5, 10, 15, _____.

14. Nick had 11 pets. He gave 5 of them to a pet shop. How many pets does Nick have now?



15. I have £10. I bought a bar of chocolate for £3. How much do I have left? _____



16. Julie had 100 gummy bears in a bottle. She wants to reduce half of it to another bottle. What is half of 100?



17. Lucy went to the supermarket. She bought 20 vanilla cookies and 20 chocolate chip cookies. How many cookies did she buy altogether?



18. Mary has 3 pens. Mina has 8 pens. How many pens do they have altogether? _____

19. There were 6 eclairs and 9 doughnuts in the bakery. I bought all of those. How many sweets did I buy in total?

20. There are 9 plates but we have 10 guests. How many extra plates are needed? _____

21. Jimmy bought 17 bottles of water. 4 bottles were damaged.

How many bottles can he use now?



22. An orange costs 6p. How much would you pay for 2 oranges?

23. A chair has 4 legs. How many legs are there in 2 chairs?

24. How many months are there in a year? _____

25. My mum packed my picnic basket with 3 sandwiches, 4 chicken lollipops and 2 cookies. How many snacks are there in my picnic basket?



26. Molly has 12p and I have 1p more than Molly. How much do I have? _____

27. Lilly picked 6 apples and Nora picked 10 apples. How many apples did they pick in total?



28. The day before Wednesday is _____.

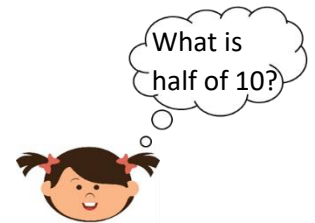
29. Name this shape: _____



30. Anna is 6 years old and her brother is 5 years older than her.
How old is Anna's brother? _____

31. What is the time an hour after 11AM? _____

32. I have to share 10 sweets equally between two children. How many sweets should each child get?



33. What would be the time 2 hours before 8 PM? _____

34. Write one more than eight in words. _____

35. There were 50 tadpoles in the pond. 20 were eaten by fish. How many tadpoles are there now?



36. Which month comes between September and November?

37. My grandma had 6 toffees. She gave one to me and two to my brother. How many toffees does grandma have now? _____



38. Anna was 9 years old last year. How old will she be next year? _____

39. Jim rode his bike for half an hour. How many minutes would that be? _____



40. Write the number with 3 tens and 2 ones. _____

41. I left home at 8 AM. I reached my friend's house at 9 AM. How long did it take to go? _____

42. Write one more than 29. _____

43. What is 10 more than 10? _____

44. There were 13 balloons. 6 balloons burst. How many balloons were left? _____



45. I have 8 chocolates. If I give half of my chocolates to my brother, how many chocolates are left for me? _____

46. There are 5 ants on a cupcake. 7 more ants joined in. How many ants are there on the cake?



47. What number is 9 minus 4. _____

48. I have to take 5 pizzas to school but my dad bought 8 pizzas. How many extra pizzas did he buy? _____

49. How many corners are there in a triangle? _____

50. The book costs £8 and the pen costs £2. What would be the total cost of a book and a pen? _____

Total = /100

ANSWER SHEET (Sample Paper)

Age 6-7

1. 8 kg
2. 8 PM
3. 6 bears
4. 12p
5. 7 apples
6. December
7. 6 cupcakes
8. 13 pizzas
9. Paul
10. 8 o'clock
11. Ten
12. 3 pages
13. 20
14. 6 pets
15. £7
16. 50
17. 40 cookies
18. 11 pens
19. 15 sweets
20. 1 plate
21. 13 bottles
22. 12p
23. 8 legs
24. 12 months
25. 9 snacks
26. 13p
27. 16 apples
28. Tuesday
29. Circle
30. 11 years
31. 12 PM or 12 Noon
32. 5 sweets
33. 6 PM
34. Nine
35. 30 tadpoles
36. October
37. 3 toffees
38. 11 years
39. 30 minutes
40. 32
41. One hour
42. 30
43. 20
44. 7
45. 4 chocolate
46. 12 ants
47. 5
48. 3 pizzas
49. 3 corners
50. £10